

Al-Farabi Kazakh National University  
Higher School of Medicine

# **DNA replication**

# LEARNING OUTCOMES

## As a result of the lesson you will be able to:

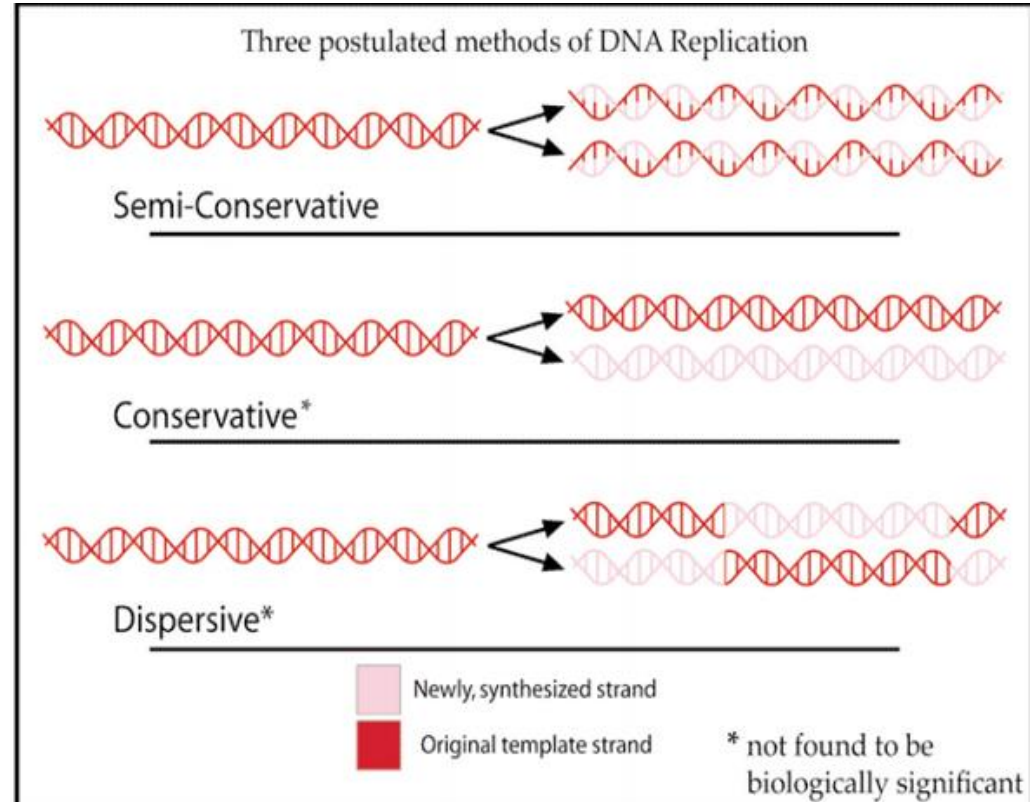
- ❑ *describe the three hypotheses of DNA replication;*
- ❑ *describe the Meselson-Stahl experiment and explain its significance;*
- ❑ *explain the molecular mechanism of semiconservative DNA replication;*
- ❑ *explain the role of main enzymes implicated in the replication process;*
- ❑ *explain proofreading mechanisms and error correction during DNA replication.*

# Literature

1. Alberts et al., pp. 239-266.
2. Cooper GM. The Cell: A Molecular Approach.  
(<https://www.ncbi.nlm.nih.gov/books/NBK9940/>)

# Case: “Most elegant experiment in molecular biology”

— in 1958 Meselson and Stahl conducted the experiment that first demonstrated how DNA replication occurs. Here are three different possibilities for DNA replication. Only one really happens, but until Meselson & Stahl conducted their experiment, each of these was plausible.



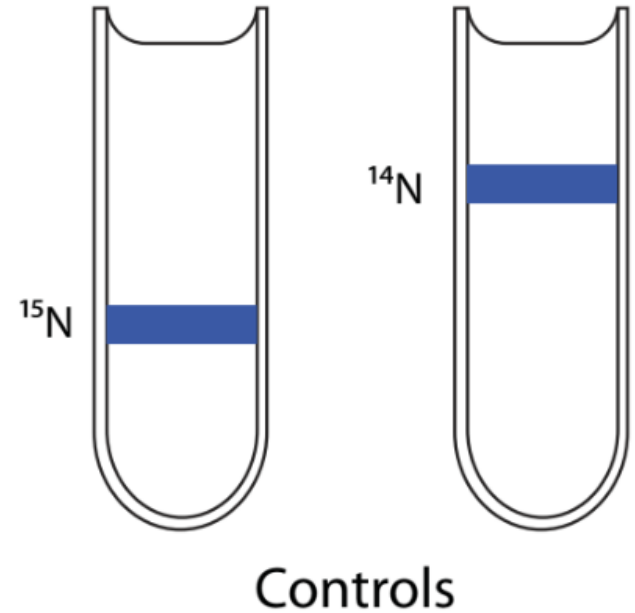
Meselson and Stahl used  $^{14}\text{N}$  and  $^{15}\text{N}$ .

1. Why is a nitrogen label a good tool for studying DNA?
2. What other molecules in a cell have nitrogen in them?
3. What's the difference between  $^{14}\text{N}$  and  $^{15}\text{N}$  at the atomic level?
4. What's the term for two atoms of the same element with different molecular masses?
5. Give an example of another element that has atoms of more than one molecular mass.



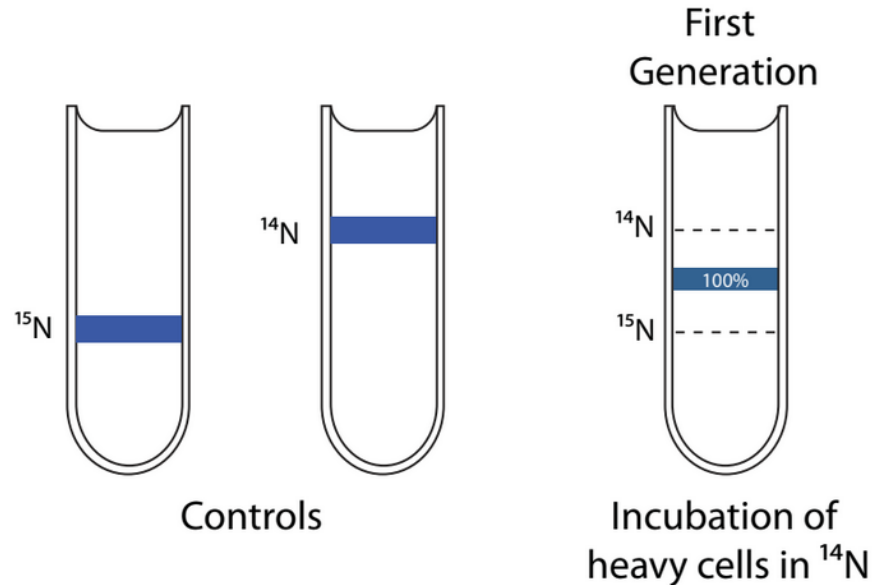
Meselson and Stahl

Meselson and Stahl grew bacteria in cultures containing only  $^{15}\text{N}$  nitrogen for many generations so that the DNA was almost entirely composed of  $^{15}\text{N}$ -containing nucleotides. These chromosomes are more dense than  $^{14}\text{N}$  chromosomes, and by spinning chromosomes at very high speeds in a density gradient tube, Meselson & Stahl could tell the difference between the two kinds of chromosomes. Heavy chromosomes sank farther to the bottom of the tube, where the liquid was more dense. Lighter chromosomes floated in the less dense liquid toward the top of the tube. This can be represented by the diagram. The blue lines represent the location of chromosomes in the tubes after centrifugation.



After growing the bacteria in  $^{15}\text{N}$ , producing bacteria with “heavy” chromosomes, they shifted the bacteria to growth conditions where only  $^{14}\text{N}$  was present—making all the newly synthesized DNA from this less dense form of nitrogen.

Here are the results of their density gradients after exactly one generation of bacterial growth:

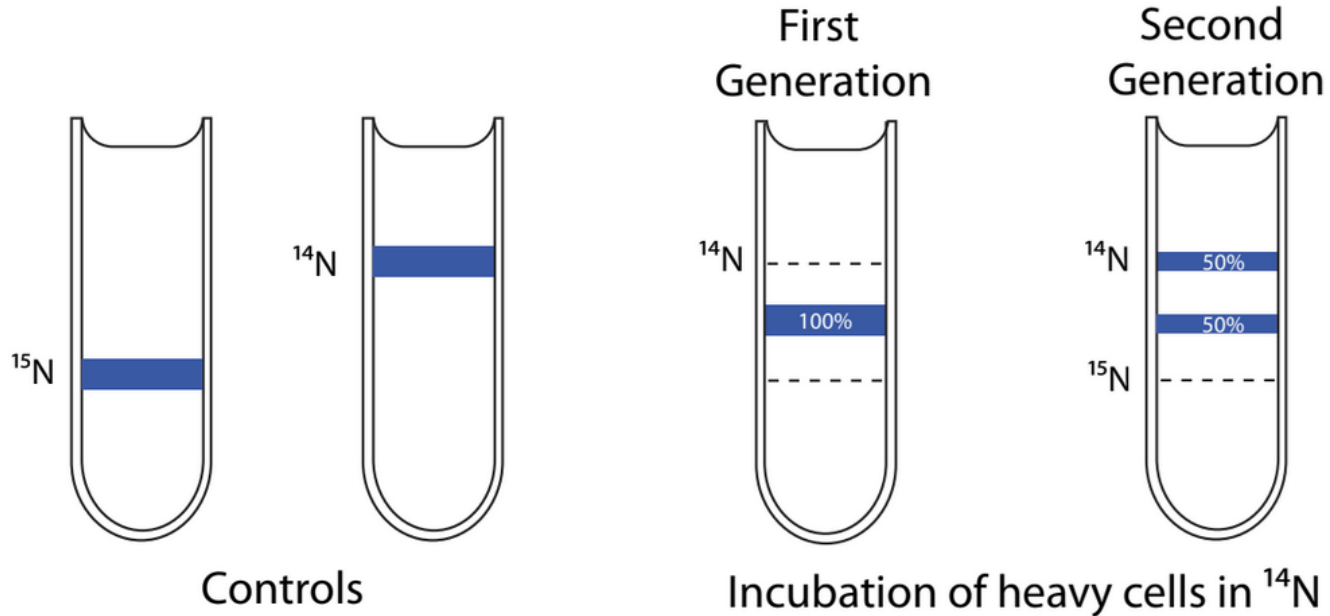


# Questions

1. Which of the three models for DNA replication are ruled out by this experiment?
2. What would the data look like if the model, you ruled out, was what really happening? Include a diagram of a tube as part of your answer.
3. What could they do to tell which of the two remaining models is actually happening, using the tools that have already been described?



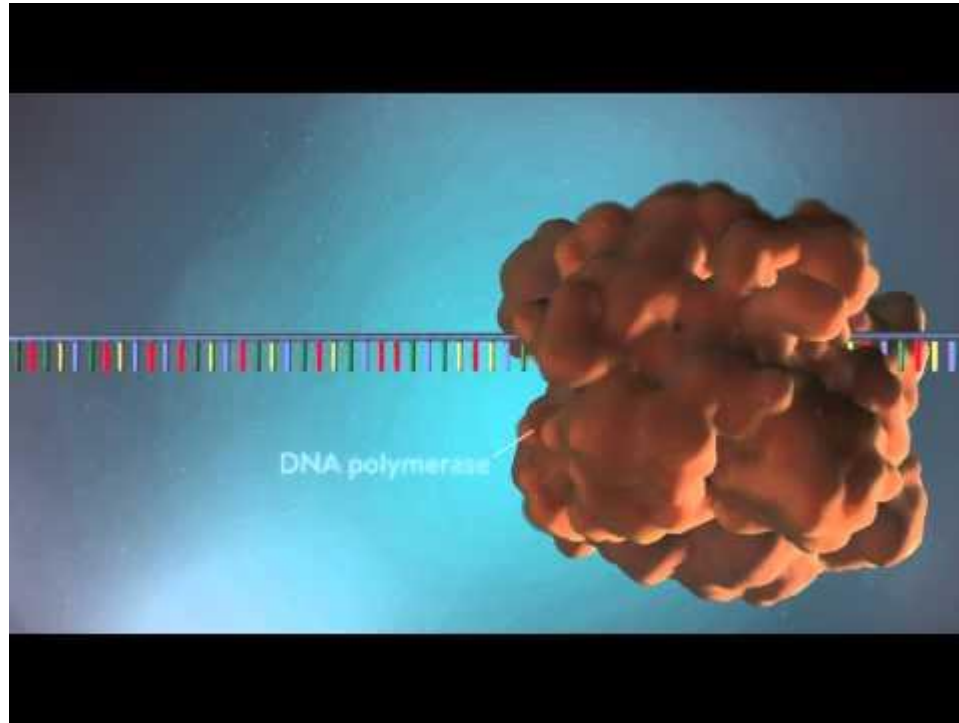
The diagram below shows the results from the experiment of the 2nd generation of cells grown in  $^{14}\text{N}$ .



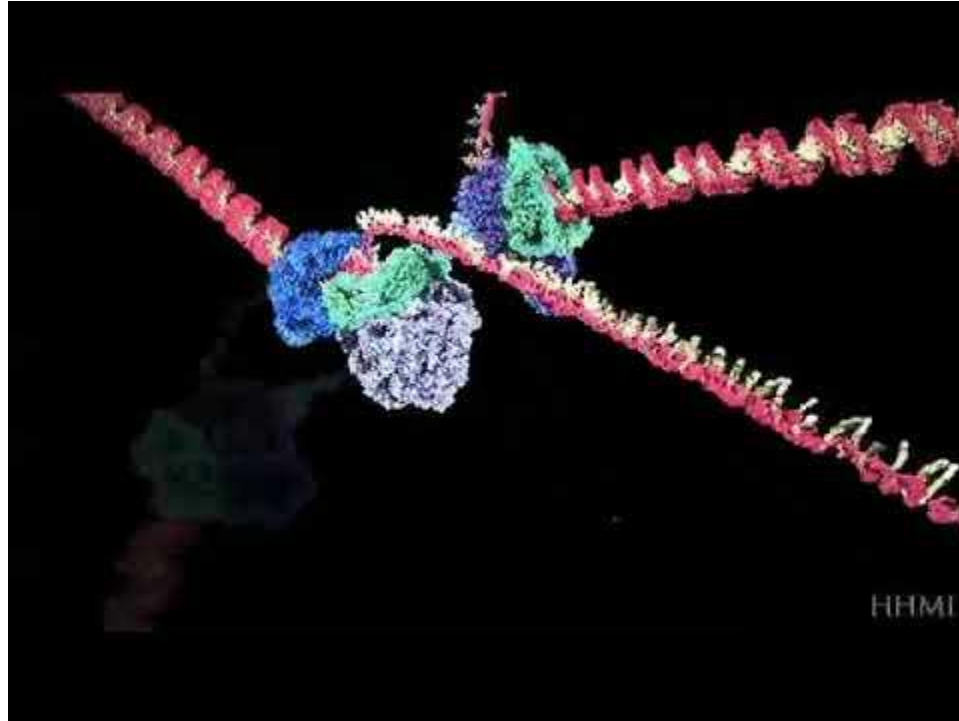
# Questions

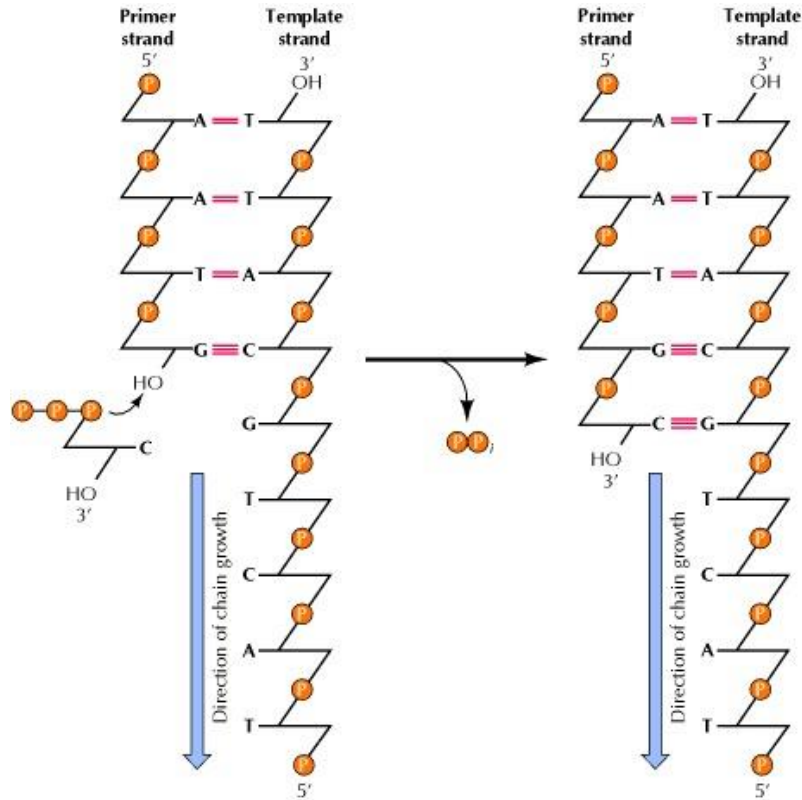
1. Which model has now been ruled out by these results?
2. What would the data look like if this model was actually happening? Include a diagram of a test tube as part of your answer.

# DNA replication video 1

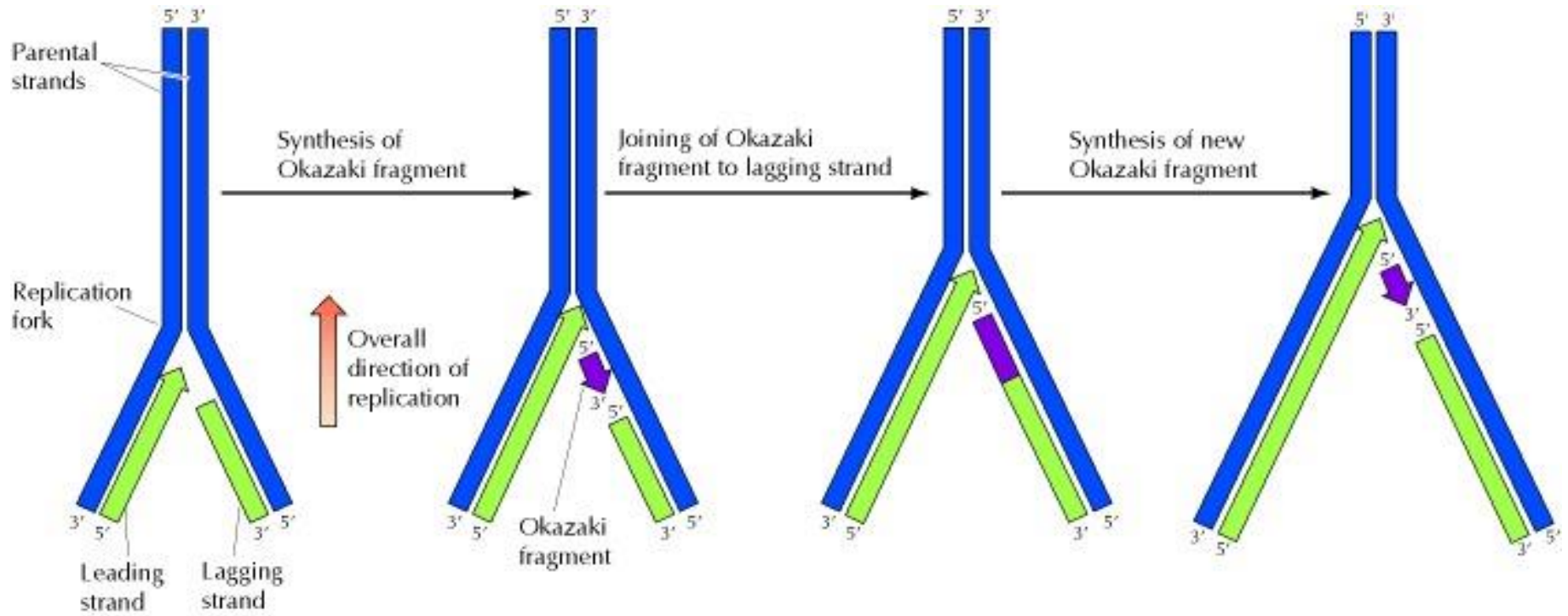


# DNA replication video 2

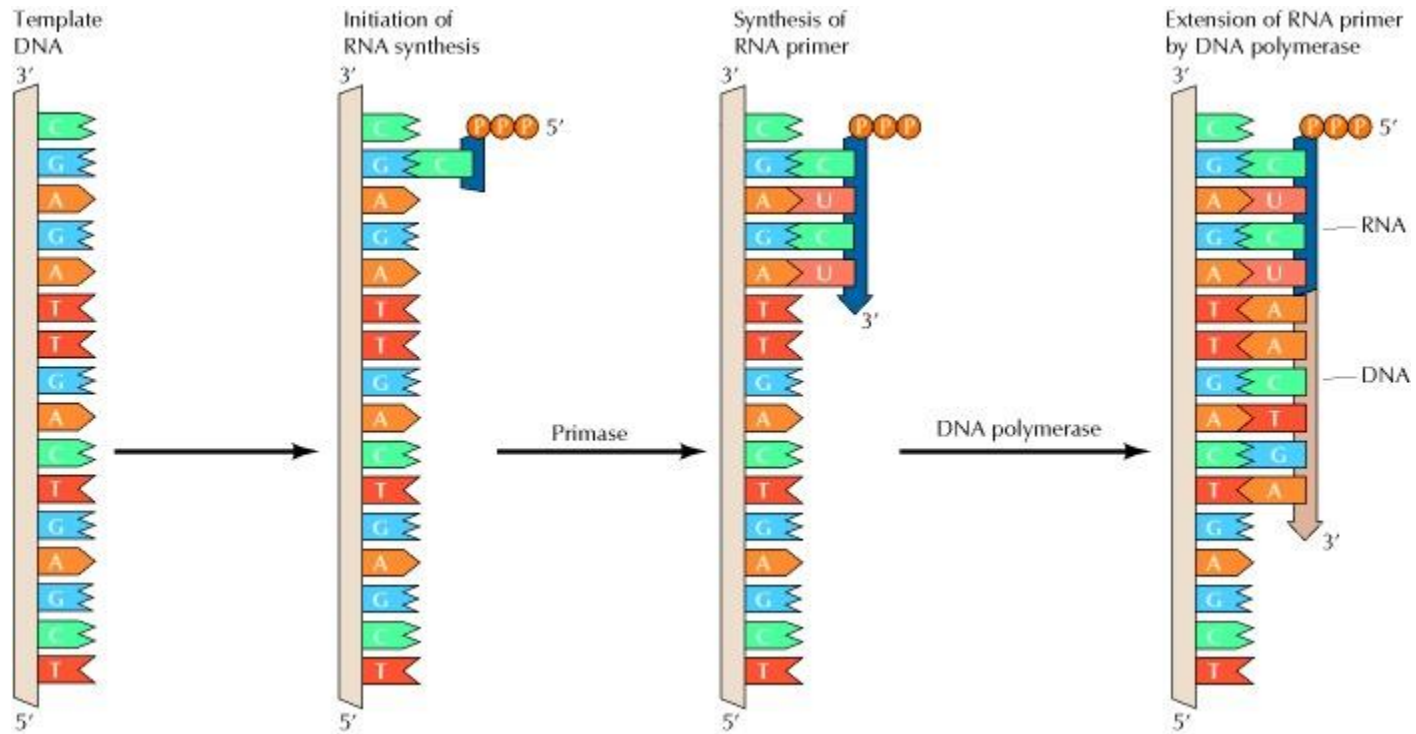




The reaction catalyzed by DNA polymerase. All known DNA polymerases add a deoxyribonucleoside 5'-triphosphate to the 3' hydroxyl group of a growing DNA chain

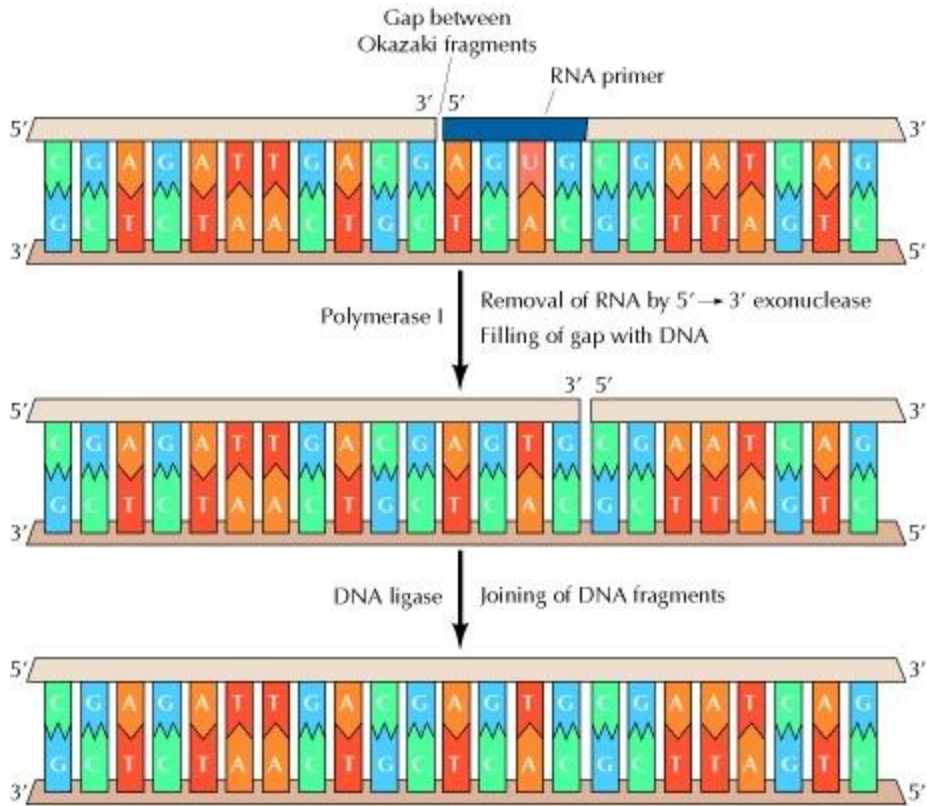


The leading strand is synthesized continuously in the direction of replication fork movement. The lagging strand is synthesized in small pieces (Okazaki fragments) backward from the overall direction of replication. The Okazaki fragments are then joined by the action of DNA ligase.



## Initiation of Okazaki fragments with RNA primers

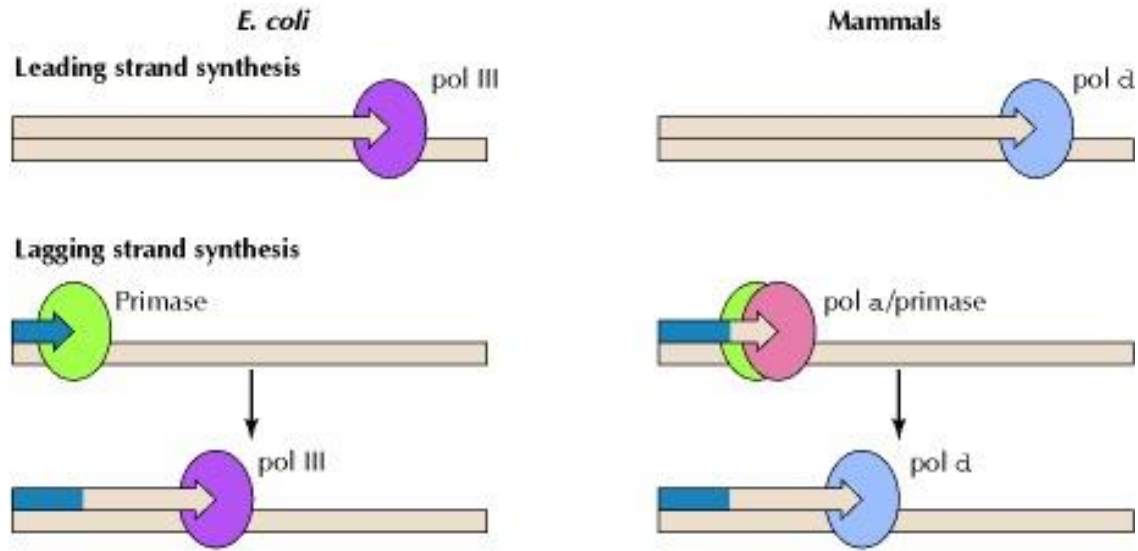
Short fragments of RNA serve as primers that can be extended by DNA polymerase.



## Removal of RNA primers and joining of Okazaki fragments

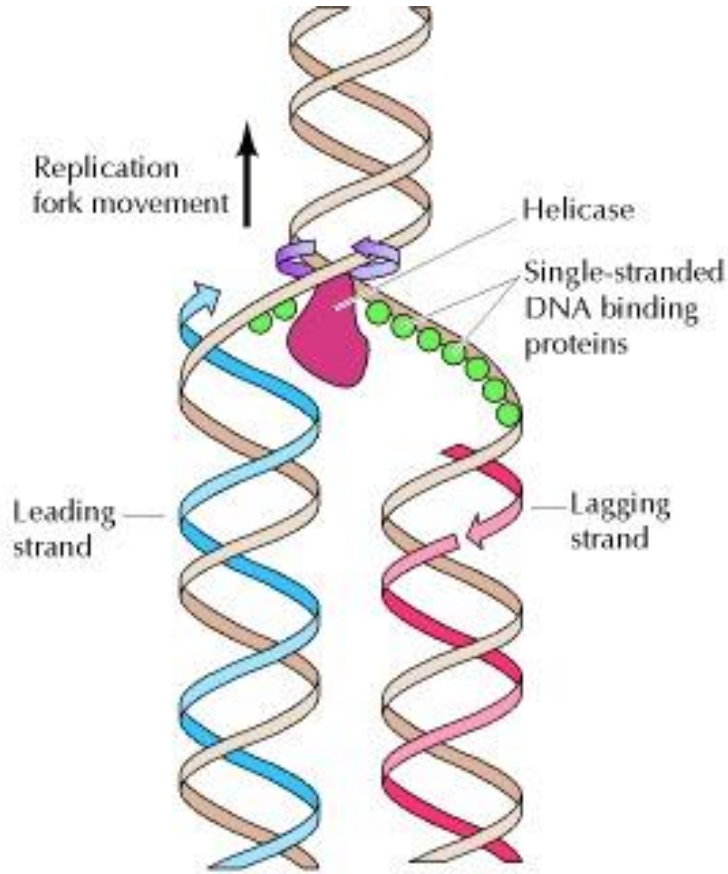
Because of its 5' to 3' exonuclease activity, DNA polymerase I removes RNA primers and fills the gaps between Okazaki fragments with DNA. The resultant DNA fragments can then be joined by DNA ligase.





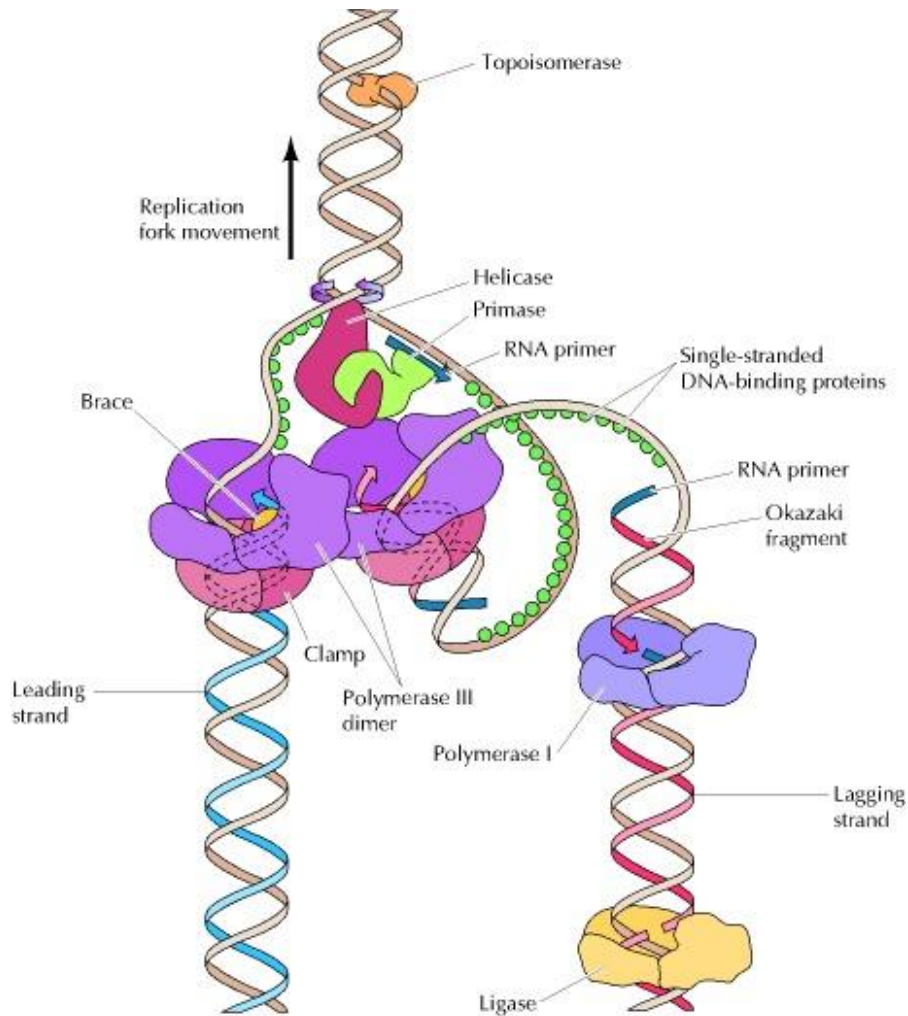
## Roles of DNA polymerases in *E. coli* and mammalian cells

The leading strand is synthesized by polymerase III (pol III) in *E. coli* and by polymerase  $\delta$  (pol  $\delta$ ) in mammalian cells. In *E. coli*, lagging strand synthesis is initiated by primase, and RNA primers are extended by polymerase III. In mammalian cells, lagging strand synthesis is initiated by a complex of primase with polymerase  $\alpha$  (pol  $\alpha$ ). The short RNA-DNA fragments synthesized by this complex are then extended by polymerase  $\delta$ .



## Action of helicases and single-stranded DNA-binding proteins

Helicases unwind the two strands of parental DNA ahead of the replication fork. The unwound DNA strands are then stabilized by single-stranded DNA-binding proteins so that they can serve as templates for new DNA synthesis.



Helicase, primase, and two molecules of DNA polymerase III carry out coordinated synthesis of both the leading and lagging strands of DNA. The lagging strand template is folded so that the polymerase responsible for lagging strand synthesis moves in the same direction as overall movement of the fork. Topoisomerase acts as a swivel ahead of the fork, and DNA polymerase I and ligase remove RNA primers and join Okazaki fragments behind the fork.

# Question 1

You are a scientist trying to recreate DNA replication in a test tube. All of the necessary ingredients (template DNA, nucleotides, enzymes, etc.) have been added to the test tube. The template DNA molecules that you are using come from a dog, and the DNA polymerase come from a cat. The newly synthesized DNA that will be produced by the DNA polymerases will be most similar to:

A) a cat's DNA.

C) a dog's DNA.

B) a mixture of dog and cat DNA.

D) a mixture of dog and cat RNA.

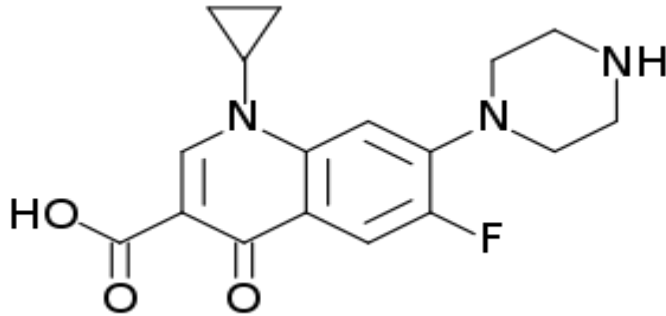
## Question 2

A scientist is replicating human DNA in a test tube and has added intact DNA, the replisome complex, and the four deoxyribonucleoside triphosphates. To the surprise of the scientist, there was no DNA synthesized, as determined by the incorporation of radio-labeled precursors into acid-precipitable material. The scientist's failure to synthesize DNA is most likely due to a lack of which of the following in his reaction mixture?

- A. Reverse transcriptase
- B. Ribonucleoside triphosphates
- C. Templates
- D. Dideoxynucleoside triphosphates
- E. Sigma factor

## Question 3

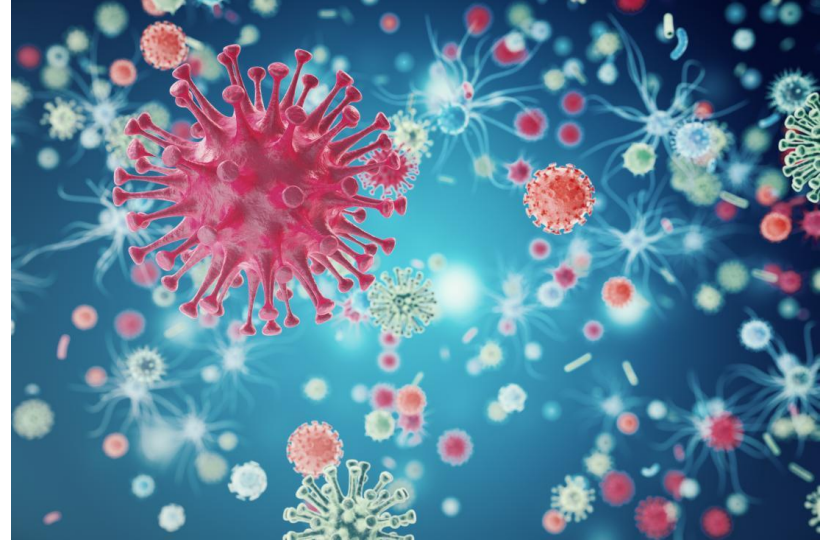
A woman visits her physician due to fever and pain upon urination. Urinary analysis shows bacteria, leukocytes, and leukocyte esterase in the urine, and the physician places the woman on a quinolone antibiotic (ciprofloxacin). Name the mammalian counterpart to the bacterial enzyme inhibited by this drug.



## Question 4

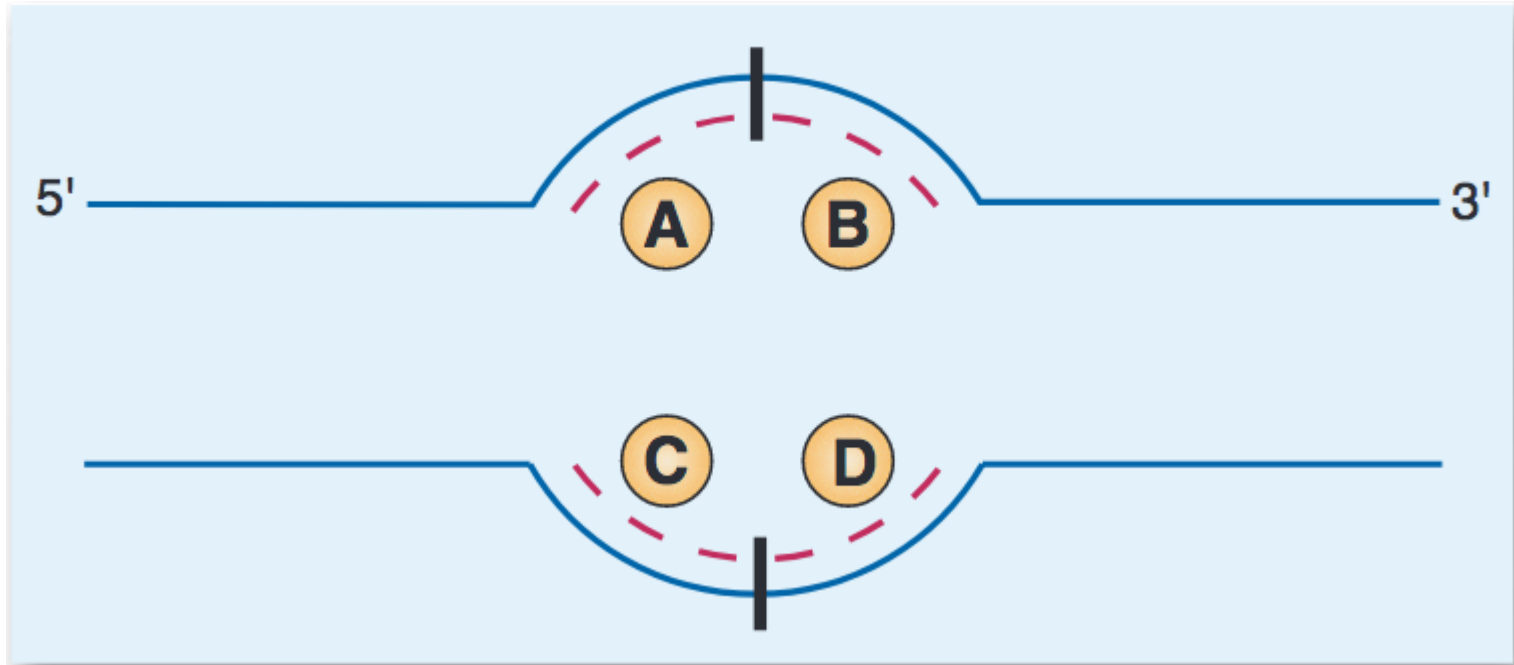
The high mutation rate of the human immunodeficiency virus (HIV) is due in part to a property of which of the following host cell enzymes?

- (A) DNA polymerase
- (B) RNA polymerase
- (C) DNA primase
- (D) Telomerase
- (E) DNA ligase



# Question 5

Consider the DNA replication fork shown below. DNA ligase will be required to finish synthesis at which labeled points on the figure?





## Question 6

The sequence of part of a DNA strand is the following: -ATTCGATTGCCACGT-. When this strand is used as a template for DNA synthesis, the product will be which one of the following?

- (A) TAAGCTAACGGGTGCA
- (B) UAAGCUAACGGGUGCA
- (C) ACGUGGGCAAUCGAAU
- (D) ACGTGGGCAATCGAAT
- (E) TGCACCCGTTAGCTTA

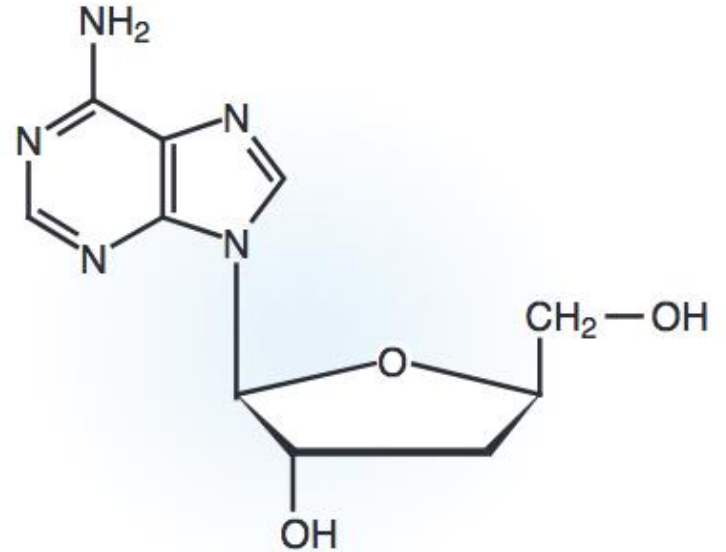
# Question 7

The isolation of nascent Okazaki fragments during DNA replication led to the surprising discovery of uracil in the fragment. The uracil is present due to which of the following?

- (A) Deamination of cytosine
- (B) Chemical modification of thymine
- (C) An error in DNA polymerase
- (D) Failure of mismatch repair
- (E) The need for a primer

## Question 8

Which answer below best predicts the effect of the following drug on the pathways indicated?



	<b>DNA Synthesis</b>	<b>RNA Synthesis</b>	<b>Protein Synthesis</b>
<b>(A)</b>	Inhibit	Inhibit	No effect
<b>(B)</b>	Inhibit	No effect	No effect
<b>(C)</b>	No effect	Inhibit	No effect
<b>(D)</b>	No effect	No effect	No effect
<b>(E)</b>	No effect	No effect	Inhibit

## Question 9

Analysis of a cell line that rapidly transforms into a tumor cell line demonstrated an increased mutation rate within cells. Further analysis indicated that there was a mutation in the DNA polymerase enzyme that synthesizes the leading strand. This inactivating mutation is likely to be in which of the following activities of this DNA polymerase?

- (A) 5'-3' exonuclease activity
- (B) 3'-5' exonuclease activity
- (C) Phosphodiester bond making capability
- (D) Uracil-DNA glycosylase activity
- (E) Ligase activity